





Flow Map: Cellular Respiration (Key and Writing Task)

Shape or #	Fill in the blank
	<p>_____ and _____ (these are called _____)</p>
	<p>_____ splits into two _____</p>
	<p>_____ is our body's energy currency. It is made of three parts Adenine, Ribose and 3 _____ groups</p>
	<p>_____ is released as waste</p>
<p>*1</p>	<p>_____ occurs in the _____ of the cell</p>
<p>*2</p>	<p>_____ occurs in the _____ of the mitochondria</p>
<p>*3</p>	<p>_____ occurs in the _____ of the mitochondria</p>

Writing Task

Your buddy Jeremy does not understand cellular respiration and he wants you to explain it to him before the upcoming test.

Write a paragraph that you could use to help him. Correctly **explain the process of cellular respiration**. Make sure that your paragraph contains all of the terms and includes a description of all of the reactions which occur during cellular respiration. Use the diagram as a guide while you write.